









## Soccer Maths



How many soccer balls are there in each question below.



1.  +  =           
         +          =         

6.  +  =           
         +          =         



2.  +  =           
         +          =         



7.  +  =           
         +          =         


3.  +  =           
         +          =         

8.  +  =           
         +          =         

4.  +  =           
         +          =         

9.  +  =           
         +          =         

5.  +  =           
         +          =         

10.  +  =           
         +          =         

