









# Sheep Maths



Can you count the sheep below?



 +   
2 + 3  
= \_\_\_\_\_



 +   
4 + 5  
= \_\_\_\_\_



 +   
2 + 2  
= \_\_\_\_\_



 +   
6 + 3  
= \_\_\_\_\_



 +   
1 + 5  
= \_\_\_\_\_

 +   
2 + 8  
= \_\_\_\_\_

 +   
5 + 5  
= \_\_\_\_\_

 +   
3 + 2  
= \_\_\_\_\_

 +   
4 + 1  
= \_\_\_\_\_

 +   
7 + 3  
= \_\_\_\_\_

